

Name _____

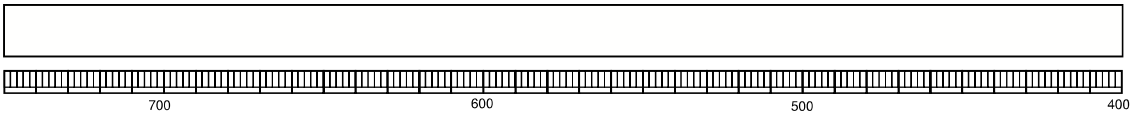
Date _____

Period _____

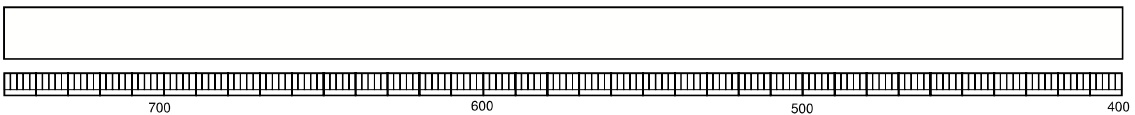
Mystery Spectra

Use your spectroscope to examine the five elements displayed to you by your teacher. Make sketches of the bright lines visible in the spaces below.

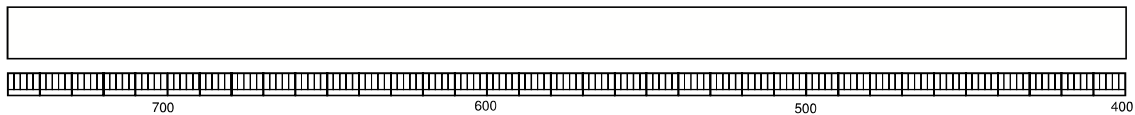
Element Name: _____



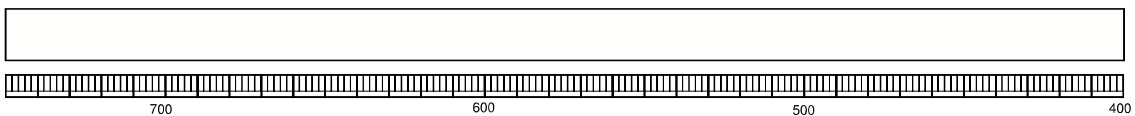
Element Name: _____



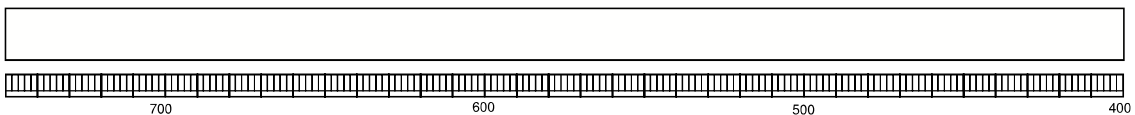
Element Name: _____



Element Name: _____



Element Name: _____



Use your spectroscope to examine the unknown element displayed to you by your teacher. Make a sketch of the bright lines visible in the space below. Compare your unknown element to the spectra above. Identify the element.

Element Name: _____

